



## Anamay School

Holiday Homework (2019-20)

Class-2<sup>nd</sup>

### Note:

- The Holiday Homework Submission Date is 25/06/2019
- School will reopen from 17/06/2019
- June onwards School Timing will be 8:30 a.m. to 2:30 p.m.
- Make separate copies for Holiday Homework

Sub: English

Marks:50

1. Look at the picture. Complete the sentence with words from the box

Pet, park, ball, top, fun, mother, picnic



Soha and her family went for a \_\_\_\_\_. They went to a \_\_\_\_\_. Soha played with a \_\_\_\_\_, her sister had brought a \_\_\_\_\_, \_\_\_\_\_ had packed many nice things to eat. Their \_\_\_\_\_ dog was also with them. Everyone had great \_\_\_\_\_!

2. Write the  $v_2$  and  $v_1 + \text{ing}$  form of the verb.

Draw, throw, catch, teach, fight, keep, swing, know, do, send, blow, find, shine, speak, make, weep, steal, play, show, invite

3. Write definition of noun and pronoun and give 5-5 examples of each.

4. Fill in the blanks with **Preposition**.

- a. Ritesh jumped \_\_\_\_\_ the river.  
b. Rahul parked the car \_\_\_\_\_ the house.



प्र. ३ निम्नलिखित शब्दों के २-२ पर्यायवाची शब्द लिखो -  
ईश्वर ,राजा ,माँ , फूल , मित्र

प्र.४ निम्नलिखित शब्दों के विलोम शब्द लिखो -  
चढ़ना ,यश ,शुद्ध ,चिकना, प्रश्न , आगे , जाड़ा , नरम ,मित्र , आज

प्र.५ संज्ञा ,सर्वनाम तथा विशेषण की परिभाषा लिखकर -उनके ५-५ उदाहरण दो ।

प्र. ६ समान लय वाले २-२ शब्द लिखो -  
जल ,मेवा ,अच्छा ,मोती , चाल , रानी , आठ , आग , हवा , धारा

प्र.७ गिनती लिखो -१ से ३० तक

प्र. ८ 'बगीचा' विषय पर पांच वाक्य लिखो -

प्र. ९ 'फूल' शब्द की सहायता से कविता की पांच पंक्तिया लिखो -

प्र.१० शब्द -सीढ़ी बनाइए -

आम

\_\_\_\_\_

\_\_\_\_\_

\_\_\_\_\_

\_\_\_\_\_

\_\_\_\_\_

\_\_\_\_\_

Sub: Mathematics

Marks:50

1. Write counting from 101 to 300

2. Tick the correct one:

a.  $3 \times 7 =$  \_\_\_\_\_

Ans : 21 ( ), 24 ( ), 30 ( )

b.  $70 + 3 =$  \_\_\_\_\_

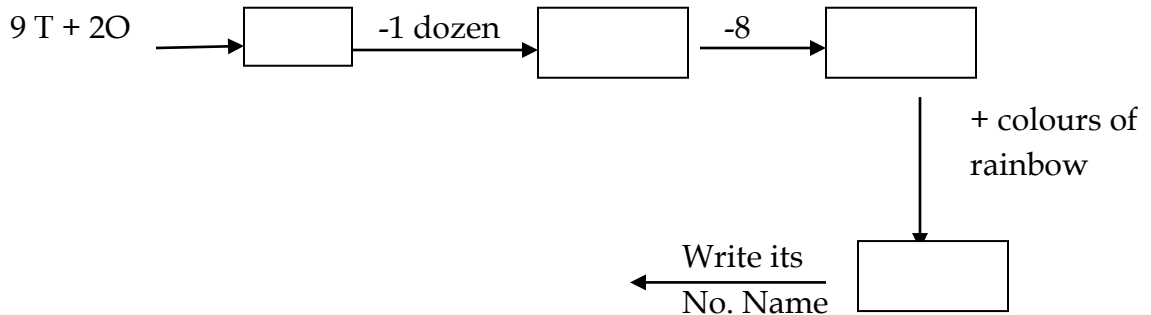
Ans : 71 ( ), 84 ( ), 73 ( )

c.  $5 \times 9 =$  \_\_\_\_\_

Ans : 45 ( ), 32 ( ), 19 ( )

- d. Days in a year = \_\_\_\_\_ Ans : 366 ( ), 364 ( ), 365 ( )
- e. 5 more than 9 = \_\_\_\_\_ Ans : 13 ( ), 20 ( ), 14 ( )
- f.  $38 - 8 =$  \_\_\_\_\_ Ans : 20 ( ), 30 ( ), 40 ( )
- g. Months in a year = \_\_\_\_\_ Ans : 16 ( ), 12 ( ), 10 ( )
- h. Hours in a day = \_\_\_\_\_ Ans : 13 ( ), 20 ( ), 24 ( )
- i.  $23 + 31 =$  \_\_\_\_\_ Ans : 54 ( ), 52 ( ), 60 ( )
- j. Double of 35 = \_\_\_\_\_ Ans : 75 ( ), 65 ( ), 70 ( )

3. Solve the puzzle:



4. Fill in the blanks :

- Shape of matchbox is \_\_\_\_\_
- Your football is \_\_\_\_\_ in shape.
- A triangle has \_\_\_\_\_ sides.
- A square and a \_\_\_\_\_ have the same number of sides.
- $48 + 50 =$  \_\_\_\_\_
- 7 comes after \_\_\_\_\_
- Expand number 39 \_\_\_\_\_
- Number name for 62 \_\_\_\_\_
- Days in a week \_\_\_\_\_
- Hands in a clock \_\_\_\_\_

5. Learn and write tables from 2 to 10

6. Draw and define the shape with two- two examples





- Square
- Triangle
- Cube
- Cuboid
- Sphere

7. Solve the word problem:

- Ranu had 12 Red pens and 8 Blue pens. How many pens does she have in all.
- Ram had 11 balloons, 6 of them burst. How many were left with him.
- There are 23 boys and 13 girls in a class. What is the total strength of the class.

- d. One bird has 2 wings. How many wings do 5 birds have.
- e. There were 21 mango trees and 45 coconut trees in a garden. How many trees were there in total.
- f. Pinky has 126 oranges, 37 of them are rotten. How many oranges are good ones.
- g. How much is 43 less than 91.
- h. The cost of one book is Rs 8. What is the cost of 9 Books.

8. Look at the picture of a parking shown below:

Vehicle	Parking
Van	
Car	
Motorcycle	
Truck	

1. There are \_\_\_\_\_ more cars than motorcycle in the parking.
2. There are \_\_\_\_\_ Vehicles in the parking altogether.
3. All the cars and vans have \_\_\_\_\_ wheels altogether.
4. All the vans have \_\_\_\_\_ fewer wheels than all the trucks.